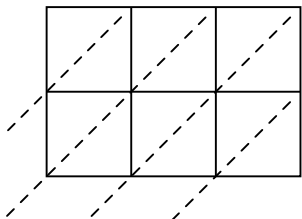


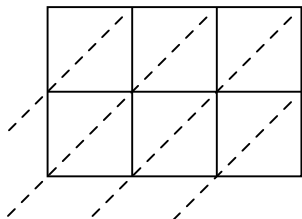


Use lattice multiplication to solve each problem.

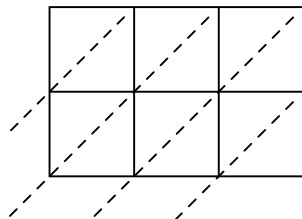
1) $828 \times 35 =$



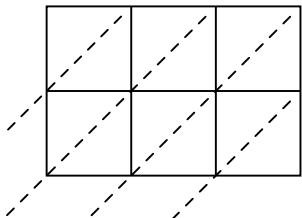
2) $953 \times 85 =$



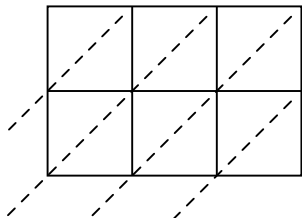
3) $706 \times 55 =$



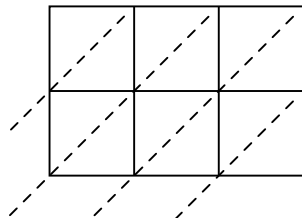
4) $862 \times 57 =$



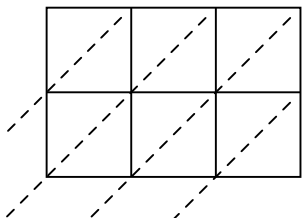
5) $350 \times 99 =$



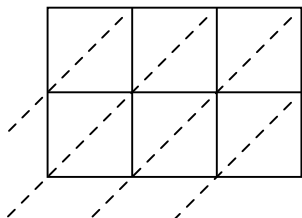
6) $488 \times 19 =$



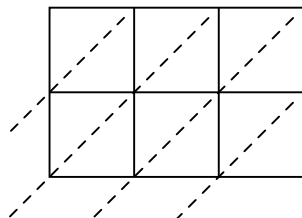
7) $543 \times 53 =$



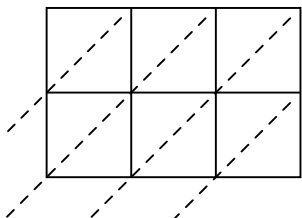
8) $387 \times 83 =$



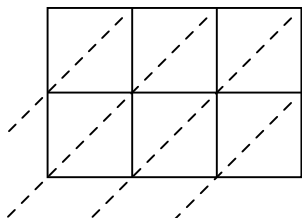
9) $702 \times 60 =$



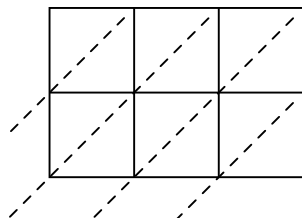
10) $244 \times 16 =$



11) $848 \times 21 =$



12) $673 \times 70 =$



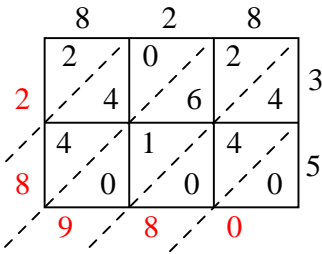
Answers

1. _____
2. _____
3. _____
4. _____
5. _____
6. _____
7. _____
8. _____
9. _____
10. _____
11. _____
12. _____

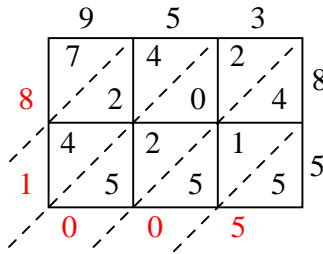


Use lattice multiplication to solve each problem.

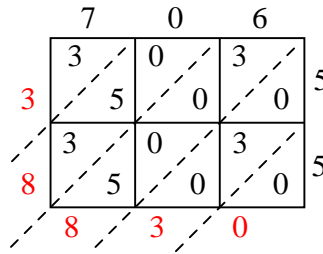
1) $828 \times 35 =$



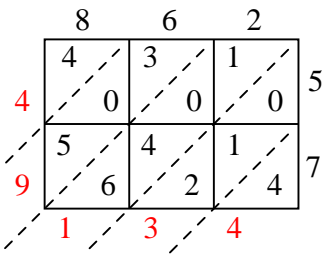
2) $953 \times 85 =$



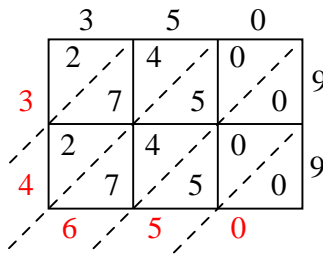
3) $706 \times 55 =$



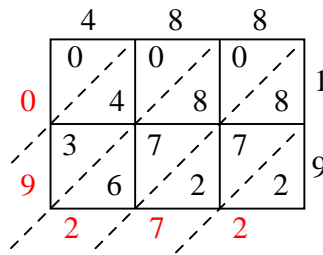
4) $862 \times 57 =$



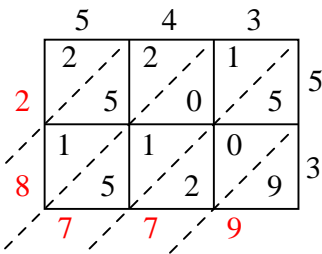
5) $350 \times 99 =$



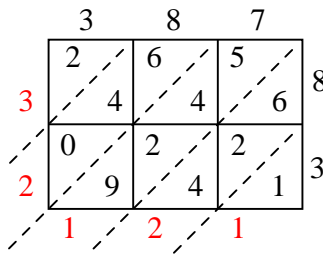
6) $488 \times 19 =$



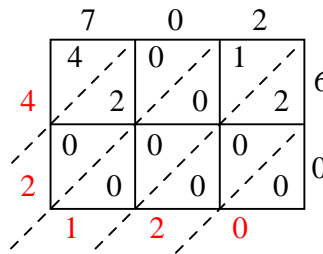
7) $543 \times 53 =$



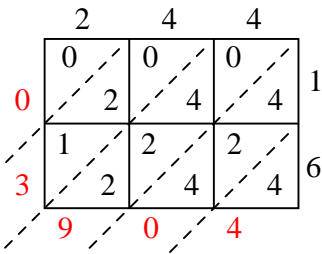
8) $387 \times 83 =$



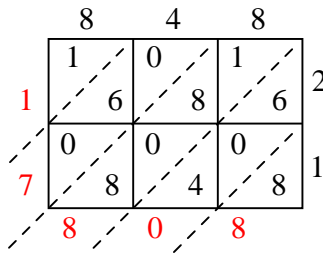
9) $702 \times 60 =$



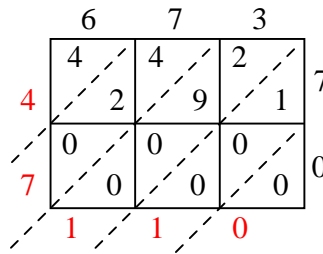
10) $244 \times 16 =$



11) $848 \times 21 =$



12) $673 \times 70 =$



Answers

1. **28,980**

2. **81,005**

3. **38,830**

4. **49,134**

5. **34,650**

6. **9,272**

7. **28,779**

8. **32,121**

9. **42,120**

10. **3,904**

11. **17,808**

12. **47,110**